

Terms Of Use



All digital resources available from Little Lions Learn® are owned by Little Lions Learn® and are protected by copyright laws. You may use the resources for your personal, non-commercial use only.

Terms Of Use

You may not distribute or share the resources with others without Little Lions Learn® explicit permission. When you purchase or download a resource from Little Lions Learn®, you are granted a limited, non-exclusive, and non-transferable license to use the resource in your classroom or for personal use. You may not resell or redistribute the resource in any form without Little Lions Learn® explicit permission. You may modify the resources to suit your needs, but you may not claim the modified version as your own or distribute it without Little Lions Learn® explicit permission.

Credit and Acknowledgements

Brands used within this product:



Ways to Connect with Us

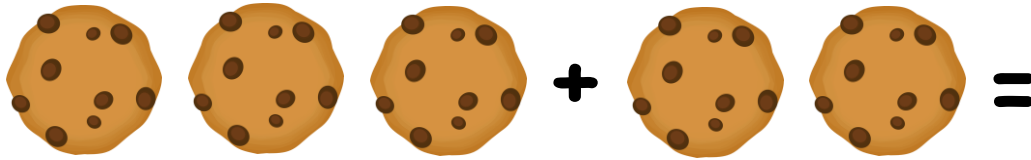


Little Lions Learn Kindergarten Math

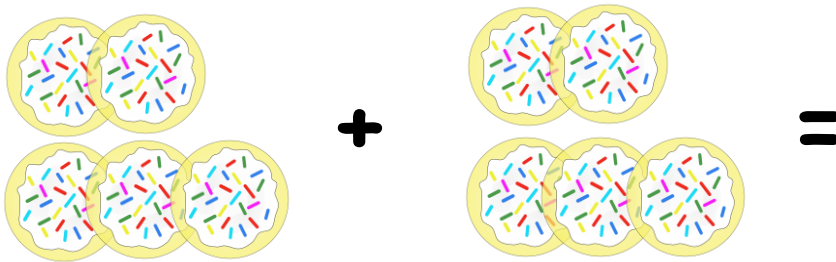
Addition Word Problems

Read the word problems and solve.

1. Jennifer had 3 cookies and her friend Sarah had 2 cookies. How many cookies did they have in all?



2. Grandma baked 5 cookies on Monday. She still had 5 cookies left over from the last time she baked cookies. How many cookies did she have in all?



3. Max gave his teacher 3 cookies. Jose gave her 3 cookies. Lola gave her 3 cookies. How many cookies did their teacher get for her birthday?




Little Lions Learn Kindergarten Math


Addition Word Problems

Read the word problems and solve.


1. Jennifer had 3 cookies and her friend Sarah had 2 cookies. How many cookies did they have in all?



2. Grandma baked 5 cookies on Monday. She still had 5 cookies left over from the last time she baked cookies. How many cookies did she have in all?



3. Max gave his teacher 3 cookies. Jose gave her 3 cookies. Lola gave her 3 cookies. How many cookies did their teacher get for her birthday?

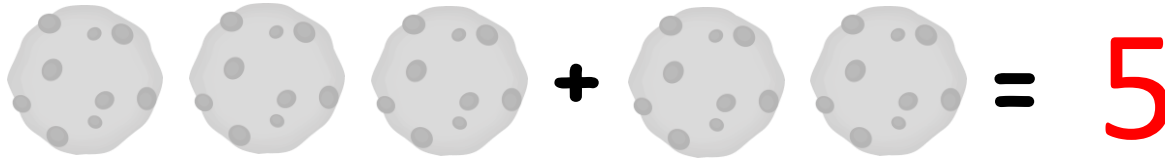


Little Lions Learn Kindergarten Math

Addition Word Problems


Answer Key

1. Jennifer had 3 cookies and her friend Sarah had 2 cookies. How many cookies did they have in all?



A visual equation representing the problem. It shows three cookies on the left, followed by a plus sign, then two cookies, followed by an equals sign, and finally the number 5. All cookies are identical, round, and have several dark spots on them.

2. Grandma baked 5 cookies on Monday. She still had 5 cookies left over from the last time she baked cookies. How many cookies did she have in all?



A visual equation representing the problem. It shows five cookies on the left, followed by a plus sign, then five cookies, followed by an equals sign, and finally the number 10. The cookies are arranged in two groups: two in a top row and three in a bottom row. They are round with a crisscross pattern.

3. Max gave his teacher 3 cookies. Jose gave her 3 cookies. Lola gave her 3 cookies. How many cookies did their teacher get for her birthday?



A visual equation representing the problem. It shows three cookies on the left, followed by a plus sign, then three Oreo cookies, followed by another plus sign, then three more cookies, followed by an equals sign, and finally the number 9. The first and last groups of cookies are round with white icing swirls. The middle group consists of three Oreo cookies with the word 'OREO' on the top wafer.

Little Lions Learn Kindergarten Math

Addition Word Problems

Read the word problems, draw pictures, and solve.

1. Jennifer had 3 cookies and her friend Sarah had 2 cookies. How many cookies did they have in all?

$$\boxed{} + \boxed{} = \boxed{}$$

2. Grandma baked 5 cookies on Monday. She still had 5 cookies left over from the last time she baked cookies. How many cookies did she have in all?

$$\boxed{} + \boxed{} = \boxed{}$$

3. Max gave his teacher 3 cookies. Jose gave her 3 cookies. Lola gave her 3 cookies. How many cookies did their teacher get for her birthday?


$$\boxed{} + \boxed{} + \boxed{} = \boxed{}$$

Little Lions Learn Kindergarten Math


Addition Word Problems

Answer Key

1. Jennifer had 3 cookies and her friend Sarah had 2 cookies. How many cookies did they have in all?



2. Grandma baked 5 cookies on Monday. She still had 5 cookies left over from the last time she baked cookies. How many cookies did she have in all?



3. Max gave his teacher 3 cookies. Jose gave her 3 cookies. Lola gave her 3 cookies. How many cookies did their teacher get for her birthday?

