


Equal Groups and Expressions




Count how many there are in each group, then determine the expression.




_____ groups of _____

$$\underline{\quad} \times \underline{\quad} = \square$$



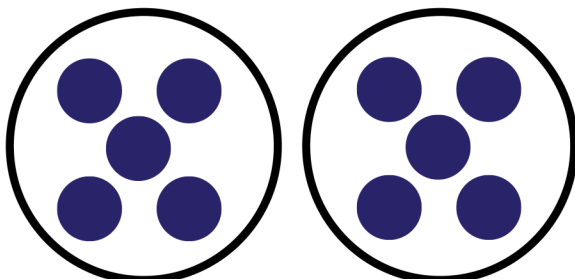
_____ groups of _____

$$\underline{\quad} \times \underline{\quad} = \square$$



_____ groups of _____

$$\underline{\quad} \times \underline{\quad} = \square$$



_____ groups of _____

$$\underline{\quad} \times \underline{\quad} = \square$$

Terms Of Use



All digital resources available from Little Lions Learn® are owned by Little Lions Learn® and are protected by copyright laws. You may use the resources for your personal, non-commercial use only.

Terms Of Use

You may not distribute or share the resources with others without Little Lions Learn® explicit permission. When you purchase or download a resource from Little Lions Learn®, you are granted a limited, non-exclusive, and non-transferable license to use the resource in your classroom or for personal use. You may not resell or redistribute the resource in any form without Little Lions Learn® explicit permission. You may modify the resources to suit your needs, but you may not claim the modified version as your own or distribute it without Little Lions Learn® explicit permission.

Credit and Acknowledgements

Brands used within this product:



Ways to Connect with Us

