

# NOMBRA ESE POLÍGONO

Can you name these polygons according to their Spanish name?

Name: \_\_\_\_\_

Date: \_\_\_\_\_


Section: \_\_\_\_\_

Score: \_\_\_\_\_




Four sides:

Square




Five sides

Pentagon




Six sides

Hexagon




Seven sides

Heptagon



Eight sides

Octagon



Nine sides

Nonagon

# NOMBRA ESE POLÍGONO

Can you name these polygons according to their Spanish name?

Name: \_\_\_\_\_

Date: \_\_\_\_\_


Section: \_\_\_\_\_

Score: \_\_\_\_\_




Four sides:

Cuadrado




Five sides

Pentágono




Six sides

Hexágono




Seven sides

Heptágono



Eight sides

Octágono



Nine sides

Eneágono

# NOMBRA ESE POLÍGONO

Can you name these polygons according to their Spanish name?

Name: \_\_\_\_\_


Date: \_\_\_\_\_

Section: \_\_\_\_\_


Score: \_\_\_\_\_




Four sides:




Five sides




Six sides



Seven sides



Eight sides



Nine sides